

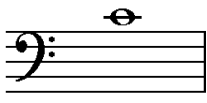









## Step 2 Quiz Test

1. FILL IN THE ANSWERS
2. BRING THIS TO THE EXAM

1.  This note is letter \_\_\_\_\_ [1 mark]
2.  This note is letter \_\_\_\_\_ [1 mark]
3.  This note is letter \_\_\_\_\_ [1 mark]
4.  This note is letter \_\_\_\_\_ [1 mark]
5.  This note is worth \_\_\_\_\_ beat(s) [1 mark]
6.  These notes are worth \_\_\_\_\_ beat(s) [1 mark]
7.  This note is worth \_\_\_\_\_ beat(s) [1 mark]
8.  This note is worth \_\_\_\_\_ beat(s) [1 mark]
9.  This sign is called \_\_\_\_\_ [1 mark]
10.  This sign is called \_\_\_\_\_ [1 mark]

**Total Score = \_\_\_\_\_/10**