









Step 3 Quiz Test

1. FILL IN THE ANSWERS
2. BRING THIS TO THE EXAM

1.  This note is letter _____ [1 mark]
2.  This note is letter _____ [1 mark]
3.  This note is letter _____ [1 mark]
4.  These notes are worth _____ beats(s) [1 mark]
5.  This note is worth _____ beat(s) [1 mark]
6.  This note is worth _____ beat(s) [1 mark]
7.  This sign means _____ [1 mark]
8.  This sign tells us there are _____ beats in each bar [1 mark]
9. To set a violin sound on my keyboard I press the _____ button [1 mark]
10. To set a rock rhythm on my keyboard I press the _____ button [1 mark]

Total Score = _____/10