










Step 4 Quiz Test

1. FILL IN THE ANSWERS
2. BRING THIS TO THE EXAM

1.  This note is letter _____ [1 mark]
2.  This note is letter _____ [1 mark]
3.  This note is letter _____ [1 mark]
4.  These notes are worth _____ beats(s) [1 mark]
5.  This note is worth _____ beat(s) [1 mark]
6.  These notes are worth _____ beat(s) [1 mark]
7.  is called a _____ sign [1 mark]
8.  is called a _____ sign [1 mark]
9.  This sign tells us there are _____ beats in each bar [1 mark]
10. The 4 spaces of the treble clef make up the word _____ [1 mark]

Total Score = _____/10