




Step 6 Quiz Test


1. FILL IN THE ANSWERS
2. BRING THIS TO THE EXAM

1.  This note is letter _____ [1 mark]

2.  This note is letter _____ [1 mark]

3.  These notes added together are worth _____beats(s) [1 mark]

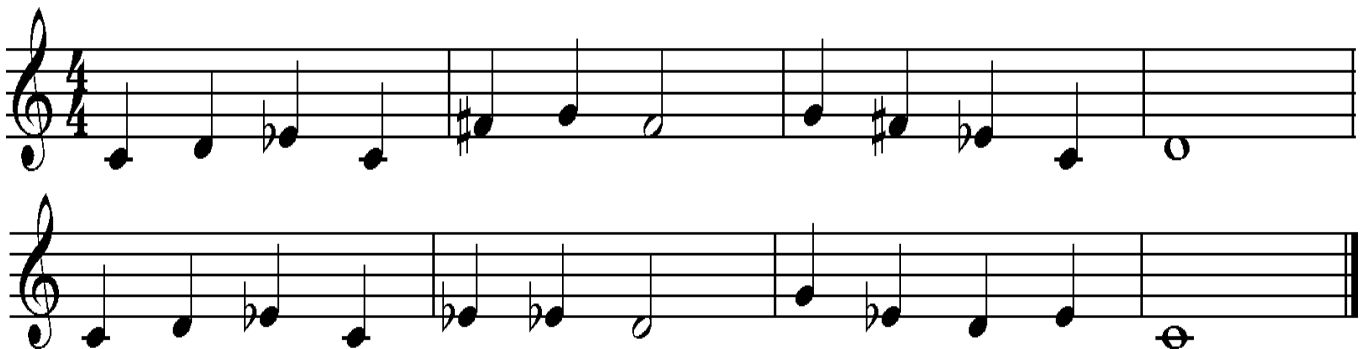
4.  This rest is worth _____beats(s) [1 mark]

5.  This is called a _____ sign [1 mark]

6. The 3 notes that make up an Dm chord are D _____ and _____ [1 mark]

7.  This is the key signature of _____ major [1 mark]

8. **Prepared Sight Reading**
Prepare the following tune as you will be asked to play it in your exam. [3 marks]



Total Score = ____/10